






KUDY PLAVALY RYBKY?



ÚKOL: NEJPRVE PRSTEM OBTÁHNI TRASU KAŽDÉ RYBKY.
POTOM SPOJ CESTU KAŽDÉ Z NICH.